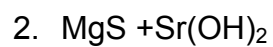


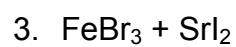
1. For each of the following combinations of equal volumes of 0.2mol/L aqueous solutions,
  - a. Write the ionic equation
  - b. Write the net ionic equation
  - c. State (if any) the precipitate



Ionic equation:

Net Ionic Equation:

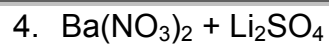
PPT?



Ionic equation:

Net Ionic Equation:

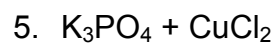
PPT?



Ionic equation:

Net Ionic Equation:

PPT?



Ionic equation:

Net Ionic Equation:

PPT?



Ionic equation:

Net Ionic Equation:

PPT?